


Count backwards from 

Three empty boxes followed by a star icon.

Write  in words.

 is 1 less than _____


1 less than  is _____

 is 1 more than _____

1 more than  is _____


Write down 3 numbers in between


 and 25

If Ron has  sweets and Jan has 14. Use **fewer** or **more** to make these correct.


Ron has _____ sweets than Jan.

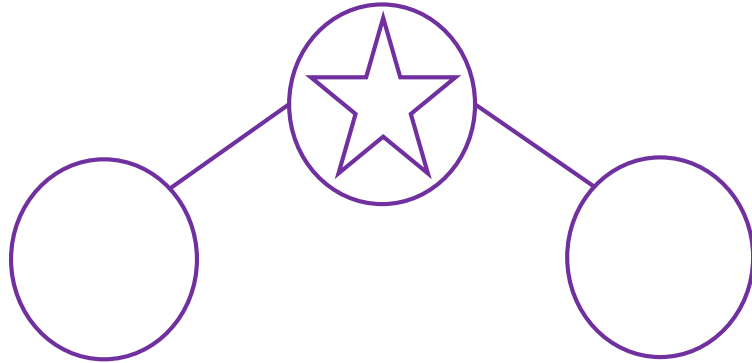
Jan has _____ sweets than Ron.


 + = 20

Show  on a tens frame.


Two 2x5 tens frames.

 (Number range up to 20 except 14)



Circle the number of cubes needed for 

A 3x3 grid of cubes and a vertical bar of 10 cubes.

Show  on the bead string.

A bead string with 10 red beads followed by 10 white beads.

