




Draw a shape (not to scale) where

 is the perimeter.

What fractions of  can you find?

-

Multiply 2 or more digits from  to  
make a product closest to 50

Create a word problem  
where  is the answer



(Number range 3 -  
digit numbers)

Make  with coins in different ways

It would take  
minutes to



*First4Maths*

